

CONFIDENTIAL



UNIVERSITI TUN HUSSEIN ONN MALAYSIA

**FINAL EXAMINATION
SEMESTER II
SESSION 2010/2011**

COURSE : ELECTRICAL MEASUREMENT AND INSTRUMENTATION

COURSE CODE : BEE 2123

PROGRAMME : BEE

EXAMINATION DATE : APRIL/MAY 2011

DURATION : 2 HOURS 30 MINUTES

INSTRUCTION : ANSWER **FOUR (4)** QUESTIONS ONLY

THIS PAPER CONSISTS OF 6 PAGES

CONFIDENTIAL

- Q1** (a) A PMMC instrument with a 600Ω coil resistance gives full scale deflection (FSD) with a $450\mu\text{A}$ coil current. The instrument will be converted into a dc ammeter with a 11Ω shunt resistance.
- (i) Draw the circuit. (5 marks)
- (ii) Derive the formula of the FSD current. (5 marks)
- (iii) Calculate the FSD current. (5 marks)
- (b) A dc ammeter is constructed of a PMMC instrument and shunt resistor. If the instrument has a $1.5\text{k}\Omega$ coil resistance and $50\mu\text{A}$ FSD current, and the measured current at 0.25 FSD is $200\mu\text{A}$.
- (i) Derive the formula of the shunt resistor. (5 marks)
- (ii) Calculate the shunt resistance. (5 marks)
- Q2** (a) A PMMC instrument with a $1\text{k}\Omega$ coil resistance is to be used as a dc voltmeter. The sensitivity of the voltmeter is $12.5\text{k}\Omega/\text{V}$ while its FSD is 50V .
- (i) Draw the circuit. (5 marks)
- (ii) Derive the formula of the multiplier resistor. (5 marks)
- (iii) Calculate the multiplier resistance. (5 marks)
- (b) The voltages at opposite ends of a $100\Omega \pm 5\%$ resistor are measured using the voltmeter as $V_1 = 15\text{V}$ and $V_2 = 5\text{V}$. The measuring accuracies are $\pm 0.4\text{V}$ for V_1 and $\pm 3\%$ for V_2 .
- (i) Calculate the power dissipated by the resistor. (5 marks)
- (ii) Specify its accuracy. (5 marks)

- Q3** (a) A half-wave rectifier is used with a PMMC instrument and a series resistor for AC voltage measurements. A shunt resistor is included to ensure a satisfactory rectifier forward current level. An additional diode minimizes reverse leakage current. The PMMC instrument has a 200Ω coil resistance and a 1mA FSD current. The ac voltmeter is required to give $10V_{\text{rms}}$ for FSD.
- (i) Draw the circuit. (5 marks)
- (ii) Derive the equation of the multiplier resistor. (5 marks)
- (iii) Calculate the multiplier resistance. (2.5 marks)
- (b) A full-wave rectifier is used with a PMMC instrument and a series resistor for ac voltage measurements. The PMMC instrument has a 250Ω coil resistance and a 1mA full scale deflection current. The ac voltmeter is required to give $10V_{\text{rms}}$ for full scale deflection.
- (i) Draw the circuit. (5 marks)
- (ii) Derive the equation of the multiplier resistor. (5 marks)
- (iii) Calculate the multiplier resistance. (2.5 marks)
- Q4** An ac bridge is balanced at a frequency of 1 kHz and has the following constants: arm AB (Z_1) is a $0.5\mu\text{F}$ capacitor in parallel with a $1\text{k}\Omega$ resistor, arm AD (Z_2) is a $2\text{k}\Omega$ pure variable resistance, arm BC (Z_3) is a $0.5\mu\text{F}$ pure capacitance and arm CD (Z_x) are an unknown capacitor C_x and a resistor R_x in series.
- (a) Draw circuit of the bridge. (10 marks)
- (b) Derive the balance condition to obtain the equation of arm CD (Z_x). (10 marks)
- (c) Determine the values of the components in arm CD (Z_x). (5 marks)

- Q5** (a) Figure Q5(a) shows basic diagram of an oscilloscope.
- (i) Identify numbered components in the figure. (8 marks)
- (ii) Explain the operation of the oscilloscope. (7 marks)
- (b) A Lissajous pattern as shown in Figure Q5(b) is displayed on the screen of the oscilloscope when the X input of Channel 1 is a sinusoidal waveform from a signal generator with 3 kHz frequency. Calculate the frequency of the unknown sinusoidal waveform in Y input of Channel 2. (10 marks)
- Q6** (a) Explain the difference between sensor and transducer? (5 marks)
- (b) Describe the passive and active transducers. Give two examples for each of them. (5 marks)
- (c) A resistive position transducer with a resistance of 10 k Ω and a shaft stroke of 8 cm with a bridge circuit is used to measure the bumpiness of a roadway by moving it to the right as shown in Figure Q6(c). The initial position to be used as a reference point is when the shaft is at midstroke like in the figure.
- (i) Draw the equivalent circuit of the system. (5 marks)
- (ii) Derive the formula for V_{out} in terms of the value of resistors in the circuit. (4 marks)
- (iii) What is the value of V_{out} when the shaft of the transducer is at initial position? (2 marks)
- (iv) What will the value of V_{out} be if the shaft has reached point A? (4 marks)

BEE 2123
FINAL EXAMINATION

SEMESTER/SESSION : SEMESTER II/2010-2011

PROGRAMME : BEE

COURSE: ELECTRICAL MEASUREMENT
AND INSTRUMENTATION

COURSE CODE: BEE 2123

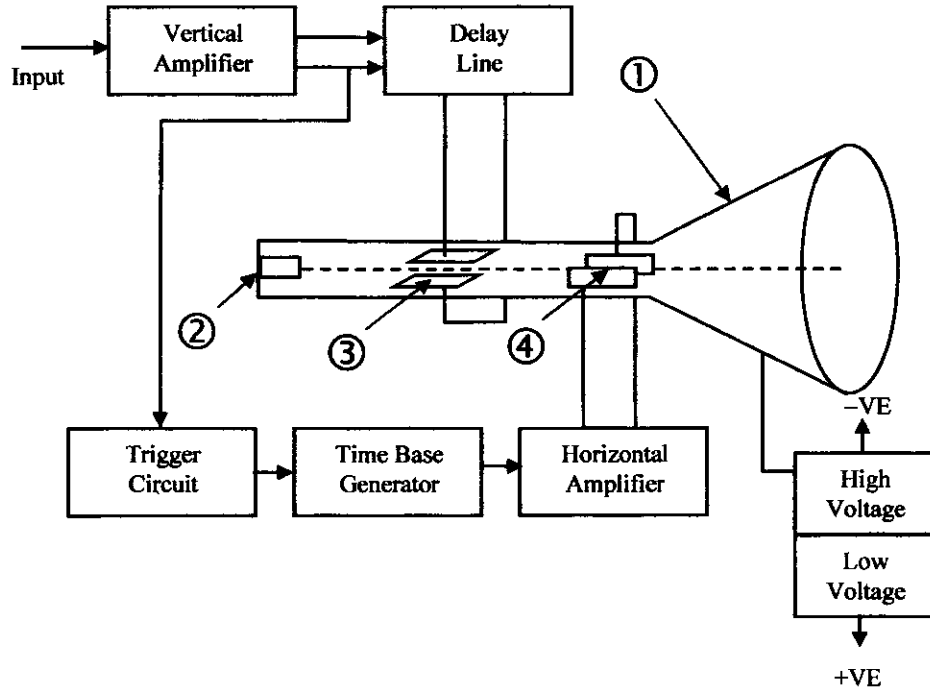


Figure Q5(a)

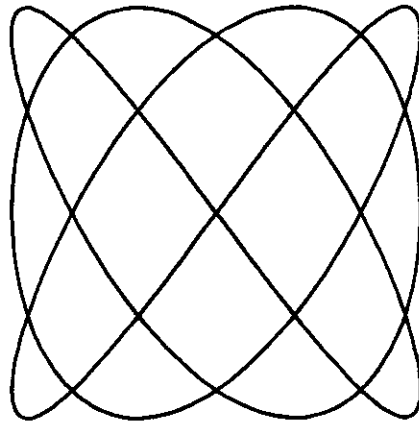


Figure Q5(b)

BEE 2123
FINAL EXAMINATION

SEMESTER/SESSION : SEMESTER II/2010-2011

PROGRAMME : BEE

COURSE: ELECTRICAL MEASUREMENT
AND INSTRUMENTATION

COURSE CODE: BEE 2123

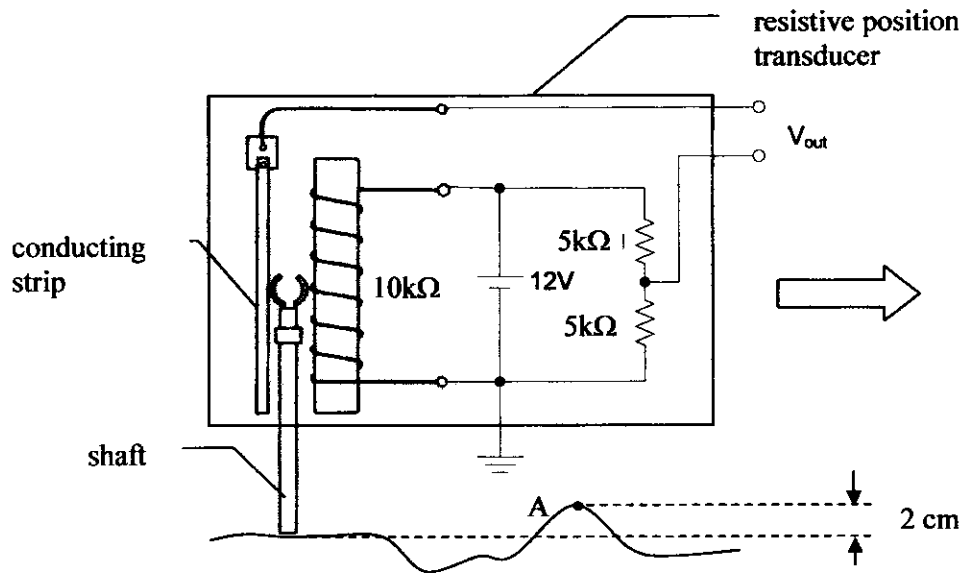


Figure O6(c)