

CONFIDENTIAL



UNIVERSITI TUN HUSSEIN ONN MALAYSIA

**FINAL EXAMINATION
(ONLINE)
SEMESTER II
SESSION 2020/2021**

COURSE NAME : TECHNOLOGY OF REFRIGERATION
AND AIR-CONDITIONING
COURSE CODE : BBA 20203
PROGRAMME CODE : BBG
EXAMINATION DATE : JULY 2021
DURATION : 3 HOURS
INSTRUCTION : ANSWER **ALL** QUESTIONS

THIS QUESTION PAPER CONSISTS OF **FOURTEEN (14)** PAGES

CONFIDENTIAL

TERBUKA

SECTION A (40 marks)

- Q1.** Temperature is defined as:
- A. How hot it is.
 - B. The level of heat.
 - C. How cold it is.
 - D. Why it is hot.
- Q2.** In which direction does heat flow?
- A. From a cold substance to a cold substance.
 - B. Up.
 - C. Down.
 - D. From a warm substance to a cold substance.
- Q3.** How is heat transferred? What is principle of heat transfer?
- I. Heat energy cannot be destroyed
 - II. Heat flow from lower temperature to higher temperature
 - III. Heat can be transferred from one substance to another
 - IV. Heat flow from higher temperature to lower temperature
- A. I, and II,
 - B. I, II, and III
 - C. I, II, III and IV
 - D. I, III, and IV
- Q4.** An increase in sensible heat causes
- A. A higher thermometer reading.
 - B. A lower thermometer reading.
 - C. No change of the thermometer reading.
 - D. Ice to melt.
- Q5.** Latent heat causes
- A. A higher thermometer reading.
 - B. Temperature to rise.
 - C. A change of state.
 - D. Temperature to fall.

TERBUKA

- Q6. For a fixed amount of gas at a constant pressure, the volume of the gas increases as the temperature increases. This statement refers to;
- Boyle's Law.
 - Charles Law.
 - Gay-Lussac's Law.
 - Combined Gas Law.
- Q7. If you push down the plunger of a bicycle pump the chamber's volume is decreased. When that happens pressure in the chamber increases and the air then rushes out of the pump and into your flat tire. What gas law does this represent?
- Boyle's Law.
 - Charles Law.
 - Gay-Lussac's Law.
 - Newton's law.
- Q8. A mass of an ideal gas occupies 0.75 m^3 at 20°C and is heated at constant pressure to 90°C . What is the final volume?
- 3.38 m^3
 - 0.93 m^3
 - 0.17 m^3
 - 0.61 m^3
- Q9. A sample of nitrogen occupies 5.50 liter under a pressure of 900 torr at 25°C . At what temperature will it occupy 10.0 liter at the same pressure?
- -109°C
 - 154°C
 - 269°C
 - 370°C
- Q10. Under conditions of fixed temperature and amount of gas, Boyle's law requires that
- $P_1V_1 = P_2V_2$
 - $PV = \text{constant}$
 - $P_1/P_2 = V_2/V_1$
- I only.
 - II only.
 - III only.
 - I, II, and III.

TERBUKA

- Q11.** Heat may be transferred from one body to another by
- A. Radiation.
 - B. Conduction.
 - C. Convection.
 - D. All of the above.
- Q12.** Which of these flammability classifications of refrigerants is based on ASHRAE Standard 34-2001?
- A. Class 1 non-flammable.
 - B. Class 2 moderately flammable.
 - C. Class 3 highly flammable.
 - D. All of these.
- Q13.** HCFC are the second group of refrigerants that have low ODP rates. HCFCs are formed as a result of the combination of the following atoms?
- A. Hydrogen, Carbon, Fluorine, and Chlorine.
 - B. Carbon, Fluorine, Calcium and Chlorine.
 - C. Hydrogen, Chlorine, Fluorine and Carbon Dioxide.
 - D. Hydrogen, Carbon, Fluorine and Chlorine.
- Q14.** HFC does not destroy the ozone layer in the stratosphere because?
- A. ODP is zero.
 - B. ODP is lower.
 - C. ODP is high.
 - D. GWP is zero.
- Q15.** Split unit air conditioning consists refrigerant of type
- A. R32 and R11.
 - B. R32 and R410A.
 - C. R11 and R141B.
 - D. R12 and R134a.
- Q16.** The ozone layer has thinned in the Antarctic and Arctic regions. The depletion of the ozone layer is especially noticeable during the spring where 50% of the ozone molecules will be destroyed. This phenomenon is known as
- A. Ozone hole
 - B. Global warming
 - C. Open burning
 - D. None of the above

TERBUKA

- Q17.** Superheating will be found in which of the following location?
- A. Discharge line
 - B. Liquid line
 - C. Suction line
 - D. Expansion line
- Q18.** What is the metering device function?
- A. Controls sub-cooling.
 - B. Cycles the compressor.
 - C. Stores refrigerant.
 - D. Meters refrigerant.
- Q19.** Which of the following will cause the compressor work harder?
- A. High suction pressure.
 - B. Low suction pressure.
 - C. Low charge.
 - D. Low load.
- Q20.** What is the condition of the refrigerant when leaving the compressor?
- A. 100 percent Low Pressure, low temperature, superheated vapour.
 - B. 100 percent High Pressure, high temperature, superheated vapour.
 - C. 100 percent Low Pressure, low temperature sub cooled Liquid.
 - D. 100 percent High Pressure, high temperature sub cooled Liquid.
- Q21.** What is the condition of the refrigerant when entering the compressor?
- A. High pressure, high temperature, 100 percent superheated vapour.
 - B. High pressure, high temperature, 100 percent sub cooled liquid.
 - C. Low pressure, low temperature, 100 percent superheated vapour.
 - D. Low pressure, low temperature, 100 percent sub cooled liquid.
- Q22.** In a vapor-compression system, which of the following refrigerant condition has the lowest pressure and temperature?
- A. Sub-cooled liquid after condensation process.
 - B. Gas/liquid mixture after expansion process.
 - C. Super-heated gas before compression process.
 - D. Super-heated gas after compression process.

TERBUKA

- Q23.** Outdoor unit components include are
- I. Condenser
 - II. Evaporator
 - III. Compressor
 - IV. Condenser fan
- A. I, and II
B. I, II, and III
C. I, III, and IV
D. I, II, III, and IV
- Q24.** Refrigerant in the evaporator
- A. changes from vapor to liquid.
 - B. changes from liquid to vapor.
 - C. stays in the vapor state.
 - D. stays in the liquid state.
- Q25.** Why do the evaporator and condenser in a refrigeration cycle consist of coils and fins?
- A. To increase pressure
 - B. To restrict flow rate of refrigerant
 - C. To enhance heat transfer
 - D. To facilitate maintenance
- Q26.** The sensing bulb of a TXV located at...
- A. Liquid Line, close to the evaporator inlet
 - B. Suction Line, close to the evaporator outlet
 - C. Suction Line, close to the evaporator inlet
 - D. Liquid Line, close to the evaporator outlet
- Q27.** What are the role(s) of a compressor in a refrigeration system?
- I. to compress the refrigerant
 - II. maintain low pressure & low temperature in evaporator
 - III. maintain low pressure & low temperature in condenser
 - IV. maintain high pressure & high temperature in evaporator
 - V. maintain high pressure & high temperature in condenser
- A. I and II
B. I, II, and III
C. I, II, and V
D. I, III, and IV

TERBUKA

- Q28.** The key function of an expansion device is...
- I. Reducing condensing pressure to evaporating pressure
 - II. Controlling refrigerants mass flow
 - III. Generates cooling
 - IV. Filling the evaporator with the required amount of liquid
- A. I, II, and III
B. I, III, and IV
C. I, II, and IV
D. I, and IV
- Q29.** Which of these statements about capillary tubes are true?
- I. Capillaries are inexpensive and allow for the equalization of system pressure.
 - II. Capillaries are inexpensive and do not allow for the equalization of pressure.
 - III. Must only be applied to systems with a 1:1 configuration between compressor and evaporator.
 - IV. They are capable of optimal superheat control regardless of fluctuating system pressures and loads.
- A. I, & III
B. II, & III
C. III, & IV
D. II, & IV
- Q30.** Which of these statements about screw compressor are true?
- I. Positive displacement compressor
 - II. Refrigerant flow is mainly in the axial direction.
 - III. Also known as a Turbo compressor.
 - IV. Suction and compression take place as the rotors unmeshed and mesh.
- A. I, III, & IV
B. II, III, & IV
C. I, II, & IV
D. I, II, & III

TERBUKA

- Q31.** Which of the following is **NOT** the advantage of having secondary refrigerant compare to direct cooling system?
- A. The risk of loss of leakage is more readily controlled.
 - B. The pipeline diameter used is considerably larger.
 - C. More easily controlled to give accurate temperature control.
 - D. Greater flexibility.
- Q32.** Which is the secondary refrigerant in central air conditioning plant?
- A. Air.
 - B. Water.
 - C. Freon-22.
 - D. None.
- Q33.** Which is the secondary refrigerant in an ice plant?
- A. Mercury
 - B. Brine solution
 - C. Freon-22
 - D. None
- Q34.** Enthalpy can be described as ...
- A. Degree of disorder.
 - B. Loss of energy over time.
 - C. property of a thermodynamic system.
 - D. Temperature decrease.

TERBUKA

Q35. Line A in the Figure Q35 below represents;

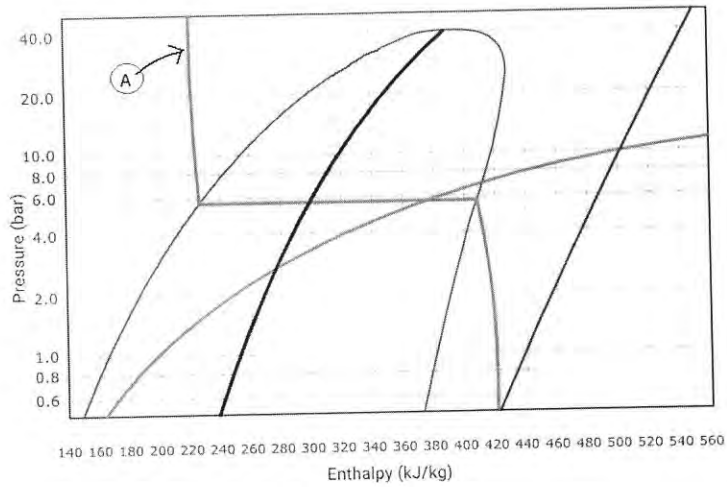


Figure Q35

- A. Constant temperature.
- B. Constant density.
- C. Constant title.
- D. Constant specific entropy.

Q36. Line B in the figure below represents;

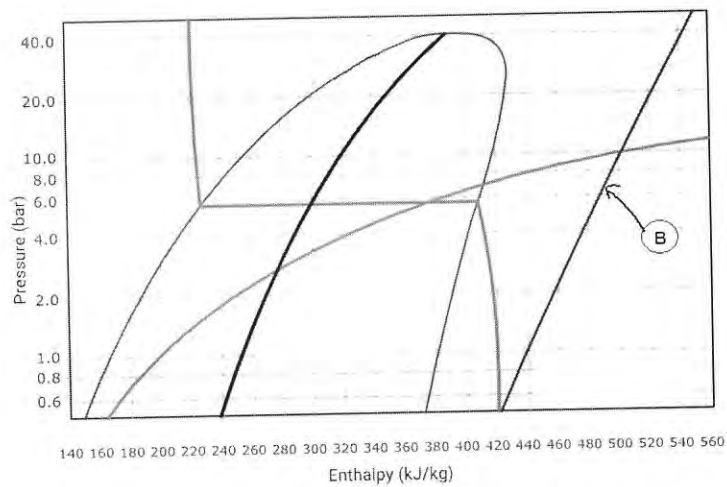


Figure Q36

- A. Constant temperature.
- B. Constant density.
- C. Constant title.
- D. Constant specific entropy.

TERBUKA

- Q37.** Psychrometry is the science and practice of air _____ and their control.
- A. Pressures.
 - B. Mixtures.
 - C. Distributions.
 - D. Diffusions.
- Q38.** What determines the amount of water vapour that air can hold?
- A. Pressure.
 - B. Vacuum.
 - C. Temperature.
 - D. Sunshine.
- Q39.** A wet-bulb temperature reflects the cooling effect of _____ water.
- A. Evaporating.
 - B. Boiling.
 - C. Frozen.
 - D. Condensing.
- Q40.** The temperature at which the air cannot hold all the water vapour mixed in it and some vapour starts condensing is called as
- A. humidification temperature.
 - B. dehumidification temperature.
 - C. dew point temperature.
 - D. none of the above.

TERBUKA

SECTION B (60 marks)

Q41 The following measurements were taken on an Air Conditioning system using R134a.

- Evaporator pressure at 0.35 MPa,
- Condenser pressure at 1.75 MPa
- Compressor inlet at 20°C, Compressor outlet at 100°C,
- Condenser outlet at 30°C

(a) Draw the cycle on the P-h diagram (**Figure Q41**) and identify the evaporating and condensing temperatures. What are the degrees of superheat and sub-cool?

(10 marks)

(b) Based on your answer in Q41(a), explaining what happen to the refrigerant in the cycle by considering the process, temperature, pressure, and state of phase at each point.

(10 marks)

(c) Based on the data from Q41(a), calculate;

- i) Heat of compression
- ii) Refrigeration effect
- iii) Total heat rejection at condenser
- iv) Compression ratio
- v) Volume of gas entering compressor

(10 marks)

TERBUKA

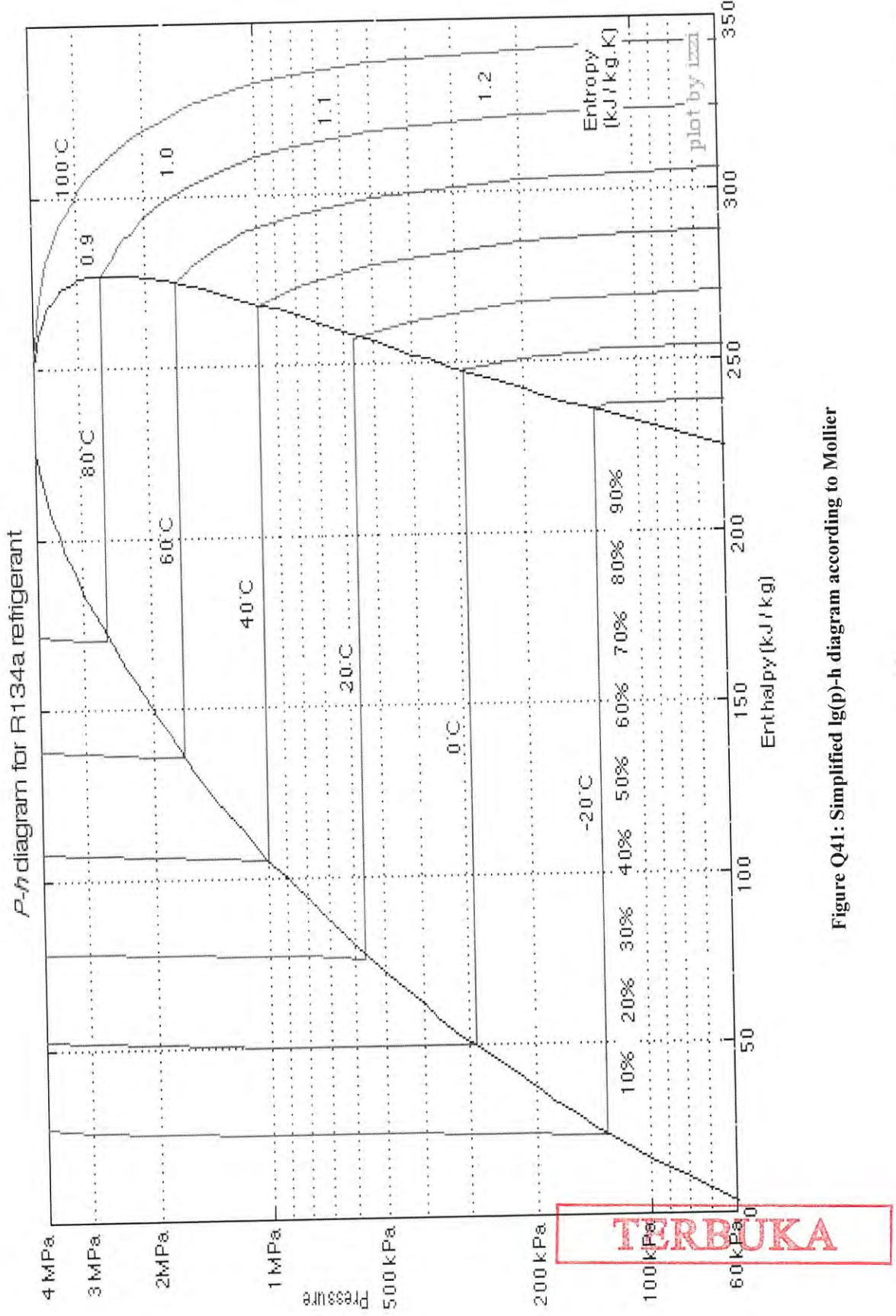


Figure Q41: Simplified lg(p)-h diagram according to Mollier

Q42 (a) Explain the Psychrometric method in refrigeration and air conditioning systems

(2 marks)

(b) After a few hours the air conditioning unit is turned on, the room temperature change to 27°C dry bulb temperature and 50% relative humidity. How much have air moisture remove from the room?

(3 marks)

(c) Using a psychrometric chart, find the required values in the space below;

Table Q42(b)

| | Dry bulb temperature | Wet bulb temperature | Relative humidity | Dew point temperature | Humidity Ratio (g/Kg) |
|---|-----------------------------|-----------------------------|--------------------------|------------------------------|------------------------------|
| A | 30 | 18 | | | |
| B | 24 | | 50 | | |
| C | 35 | | | | 14 |
| D | | 18 | | 15 | |
| E | | 20 | 100 | | |

(10 marks)

Q43 (a) Sketch a P-h (Mollier) chart and details the processes that take place for refrigeration and air conditioning systems.

(5 marks)

(b) A cooling system has the following characteristics;

- Condenser Release (condenser) $t=43^{\circ}\text{C}$, $h=163\text{kJ/kg}$, $P=1\text{mPa}$
- Evaporator Input (evaporator) $t=8^{\circ}\text{C}$, $h=163\text{kJ/kg}$, $P=0.1\text{mPa}$
- Evaporator Release (evaporator) $t=21.5^{\circ}\text{C}$, $h=314\text{kJ/kg}$, $P=0.1\text{mPa}$
- Condenser Input (condenser) $t=81^{\circ}\text{C}$, $h=364.4\text{kJ/kg}$, $P=2\text{mPa}$

Based on P-h (Mollier) chart in Figure Q4, sketch the points of each condition for the following cooling system and determine:

- i. Coefficient of Performance
- ii. Refrigeration Work Efficiency

(10 marks)

- END OF QUESTIONS -

TERBUKA