

**CONFIDENTIAL**



**UTHM**

Universiti Tun Hussein Onn Malaysia

**UNIVERSITI TUN HUSSEIN ONN MALAYSIA**

**FINAL EXAMINATION  
SEMESTER II  
SESSION 2014/2015**

COURSE NAME : STRUCTURAL ANALYSIS  
COURSE CODE : BPD 20403  
PROGRAMME : 2 BPC  
EXAMINATION DATE : JUNE 2015 / JULY 2015  
DURATION : 3 HOURS  
INSTRUCTION : ANSWER ALL QUESTIONS

THIS QUESTION PAPER CONSISTS OF SEVEN (7) PAGES

**CONFIDENTIAL**

- Q1** A frame as shown in **Figure Q1** have been imposed 10kN and 20kN loads at point B. The frame is pinned at point A and roller support at D.
- (a) Analyse the stability of this frame. (15 marks)
- (b) Calculate the internal forces of member BC by using the method of section. (10 marks)
- Q2** A cantilever beam as shown in **Figure Q2** is loaded with uniformly distributed load of 12kN/m and 5kN/m along 6m and 2m respectively. The cantilever beam also loaded with point loads of 20kN and 10kN at point C and D respectively.
- (a) Calculate the reaction forces at A ( $R_{Ay}$ ) and bending moment ( $M_A$ ). (5 marks)
- (b) Draw shear force diagram (SFD) at point A, B, C and D. (10 marks)
- (c) Draw bending moment diagram (BMD) at point A, B, C and D. (10 marks)
- Q3** A beam as shown in **Figure Q3** is subjected to point loads of 10kN and 7kN at points C and D.
- (a) Calculate the reaction forces at points A and B. (5 marks)
- (b) Compare with examples the Macaulay method and the Double Integration method for the calculation of deflection of this beam. (10 marks)
- (c) Calculate the deflection at points C and D using Macaulay method in EI form. (10 marks)

**Q4** A plane-truss as shown in **Figure Q4** have been imposed loads at two points, namely B and C. The loads imposed are 10kN and 25kN at point B and 5kN at point C.

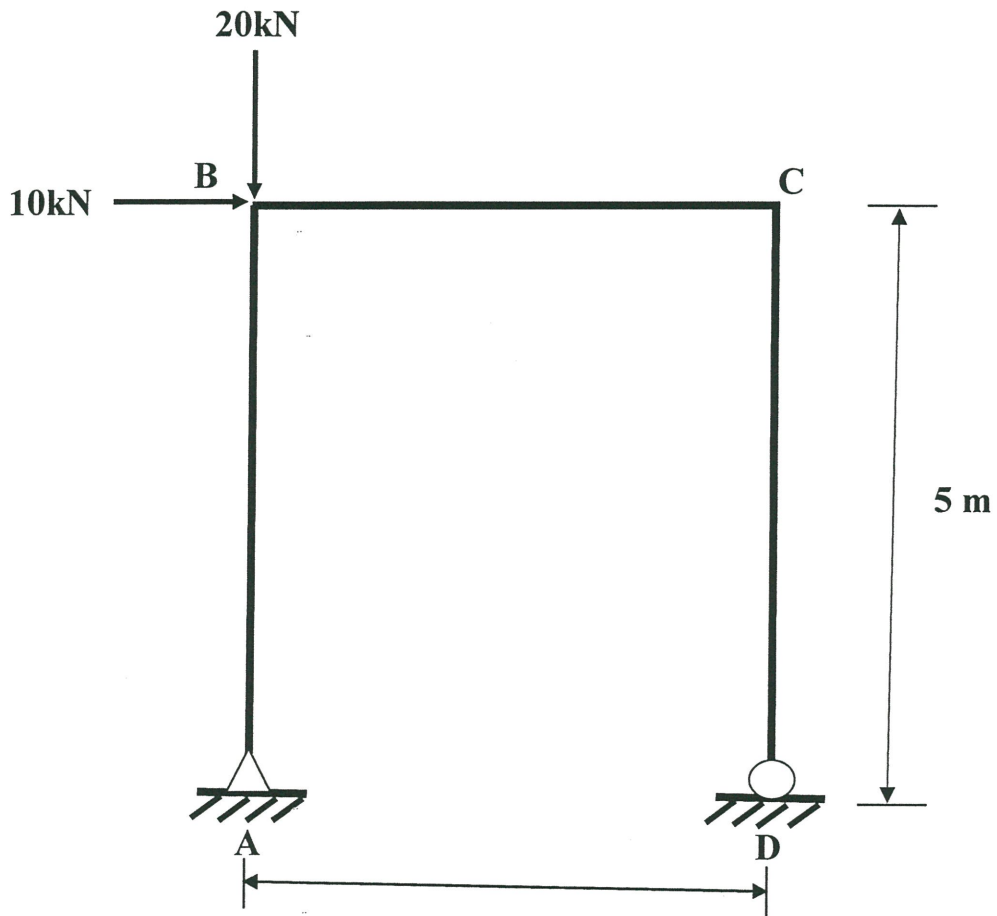
- (a) Analyse the stability of the plane-truss. (15 marks)
- (b) Calculate the internal forces of each member of the plane-truss using the method of section. (10 marks)

**- END OF QUESTIONS -**

**FINAL EXAMINATION**

SEMESTER / SESSION: SEM II / 2014/2015  
COURSE NAME : STRUCTURAL ANALYSIS

PROGRAMME : 2BPC  
COURSE CODE : BPD 20403



**FIGURE Q1**

FINAL EXAMINATION

SEMESTER / SESSION: SEM II / 2014/2015  
COURSE NAME : STRUCTURAL ANALYSIS

PROGRAMME : 2BPC  
COURSE CODE : BPD 20403

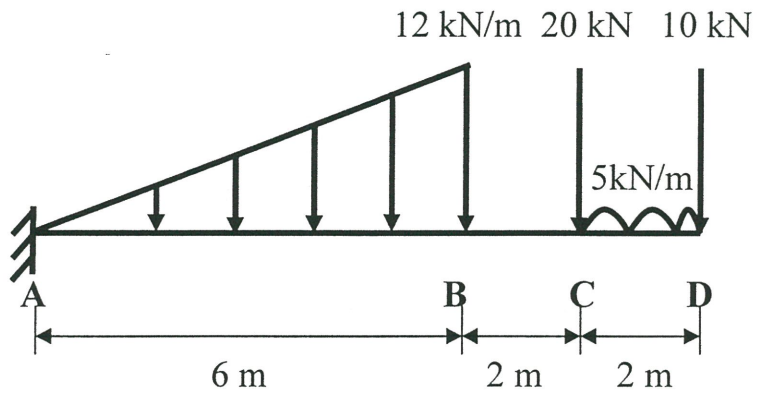
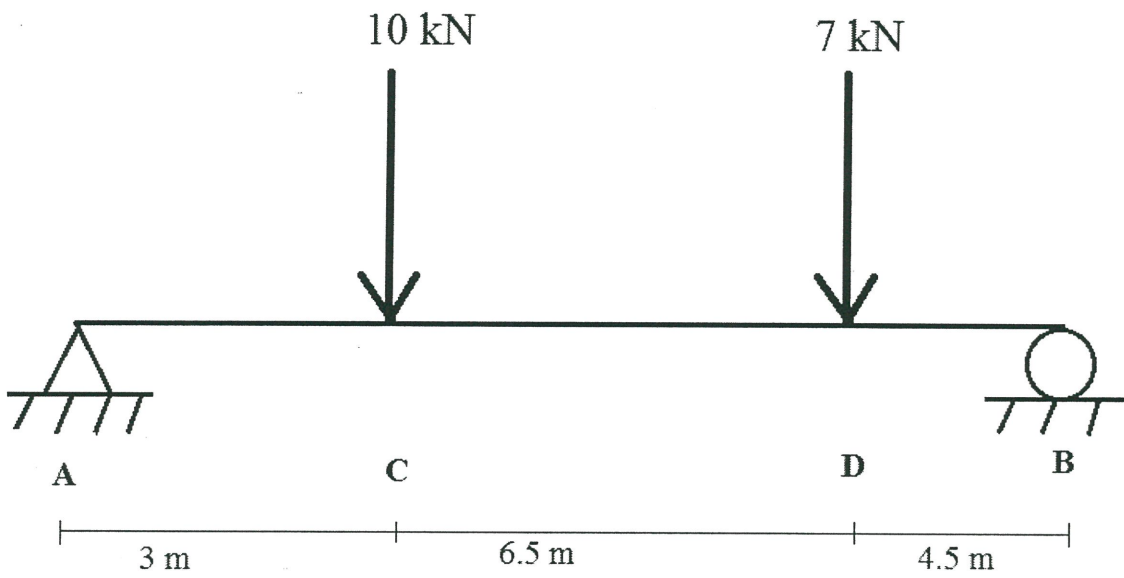


FIGURE Q2

**FINAL EXAMINATION**

SEMESTER / SESSION: SEM II / 2014/2015  
COURSE NAME : STRUCTURAL ANALYSIS

PROGRAMME : 2BPC  
COURSE CODE : BPD 20403

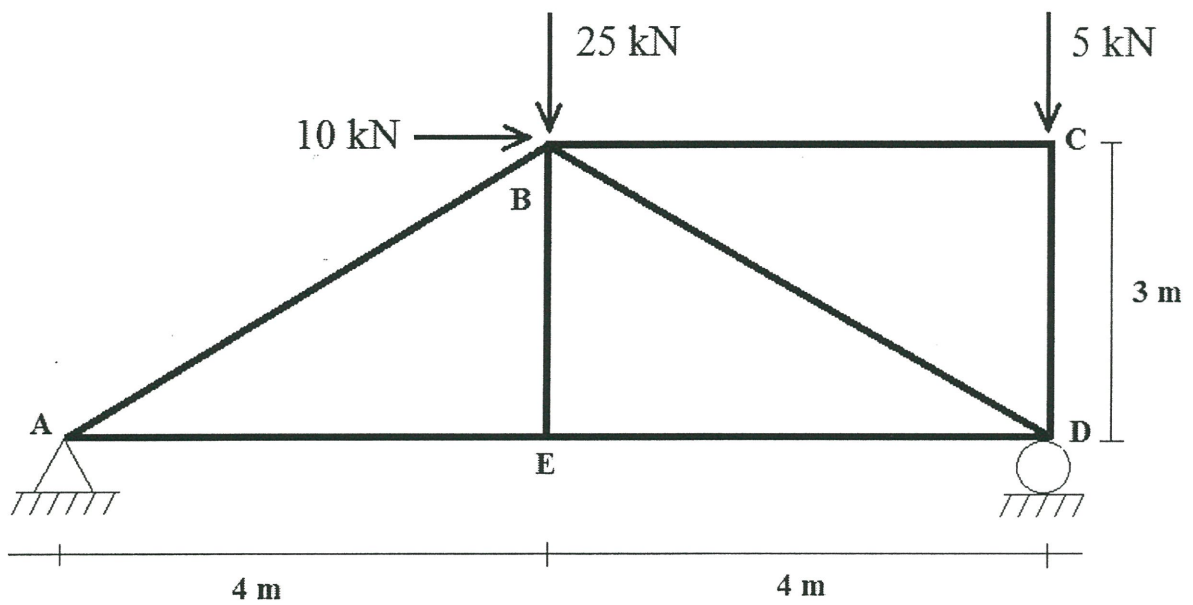


**FIGURE Q3**

**FINAL EXAMINATION**

SEMESTER / SESSION: SEM II / 2014/2015  
COURSE NAME : STRUCTURAL ANALYSIS

PROGRAMME : 2BPC  
COURSE CODE : BPD 20403



**FIGURE Q4**